



Answer the following questions.

### ½ Mark Questions

1. Consider the following statements.
  - i. Vietnam was a colony of France.
  - ii. Nigeria was a colony of Britain.

A. (i) Only      B. (ii) only      C. Both (i) and (ii)      D. None of the these
2. Find out the odd one related to colonies.  
Algeria, South Africa, Egypt, Australia.
3. Based on the relationship between the information in the first pair, complete the second pair.  
San : Nationalism:: Min : ?
4. When CCP was had been founded?
5. Who conducted long March in China?
6. Based on the relationship between the information in the first pair, complete the second pair.  
New Democracy : China :: Weak Democracy : ?
7. Based on the relationship between the information in the first pair, complete the second pair.  
Nigerian Youth Movement : Nnamdi Azikiwe:: Pan Africanism : ?
8. Who organised environment movement in Nigeria?
9. Which Nigerian tribe lived in South West of Nigeria?
10. Arrange the following countries based on its location from East to West.  
Japan, Nigeria, Vietnam, China

### 1 Mark Questions

11. Expand NCNC.
12. Define landlordism
13. Name the comical arms which were used in Vietnam by America?
14. Write any two challenges faced by Nigeria after Independence?
15. Define Pan Africanism.
16. What were the facilities provided by French rulers in Vietnam for agriculture



Answer the following questions.

### 2 Mark Questions

1. In what ways did the land reforms programmes help CCP win the war?
2. How was it possible for a small country like Vietnam to stand up the might of USA?

### 4 Mark Questions

3. What role did the schooling play in national movement of the countries like Nigeria, Vietnam and China?
4. Compare the national movement in India and Nigeria. Can you explain why it was stronger in India?

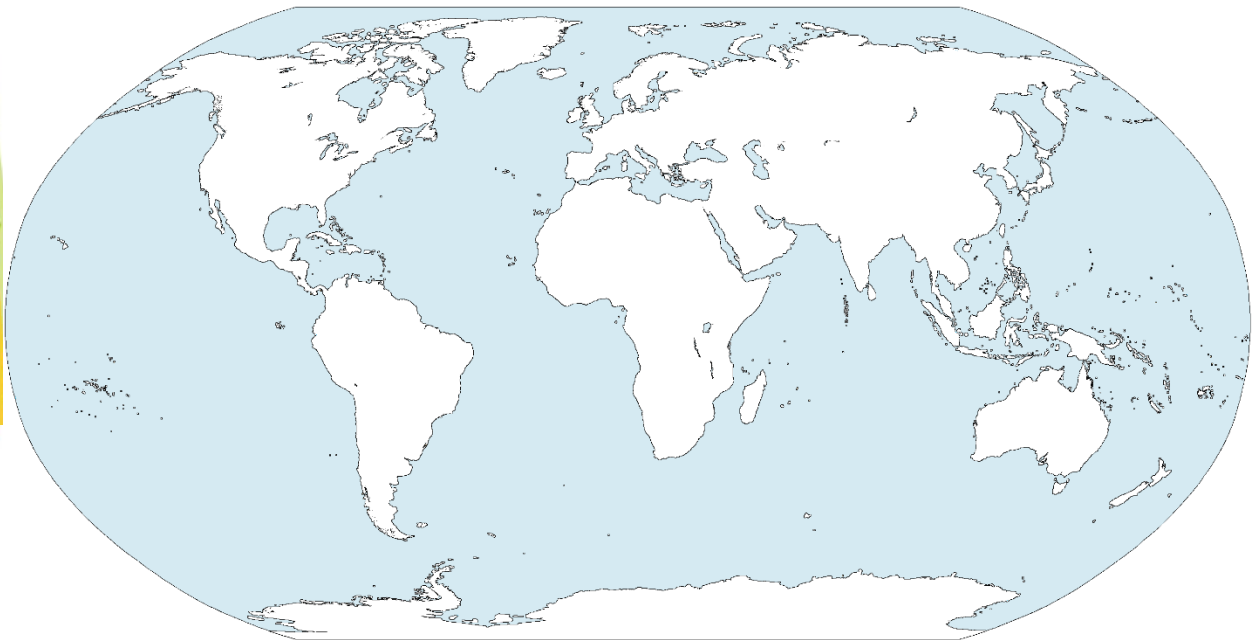


www.digitalsocialteacher.in

WORK SHEET-3

Map Pointing

1. Point out the following points in India map.



1. The country which ruled Angola (Portugal)
2. Spain
3. France
4. Austria
5. Serbia
6. The county which ruled Congo ( Belgium)
7. Italy
8. Capital city of Italy
9. Poland
10. Turkey
11. Ireland
12. Yugoslavia





www.digitalsocialteacher.in

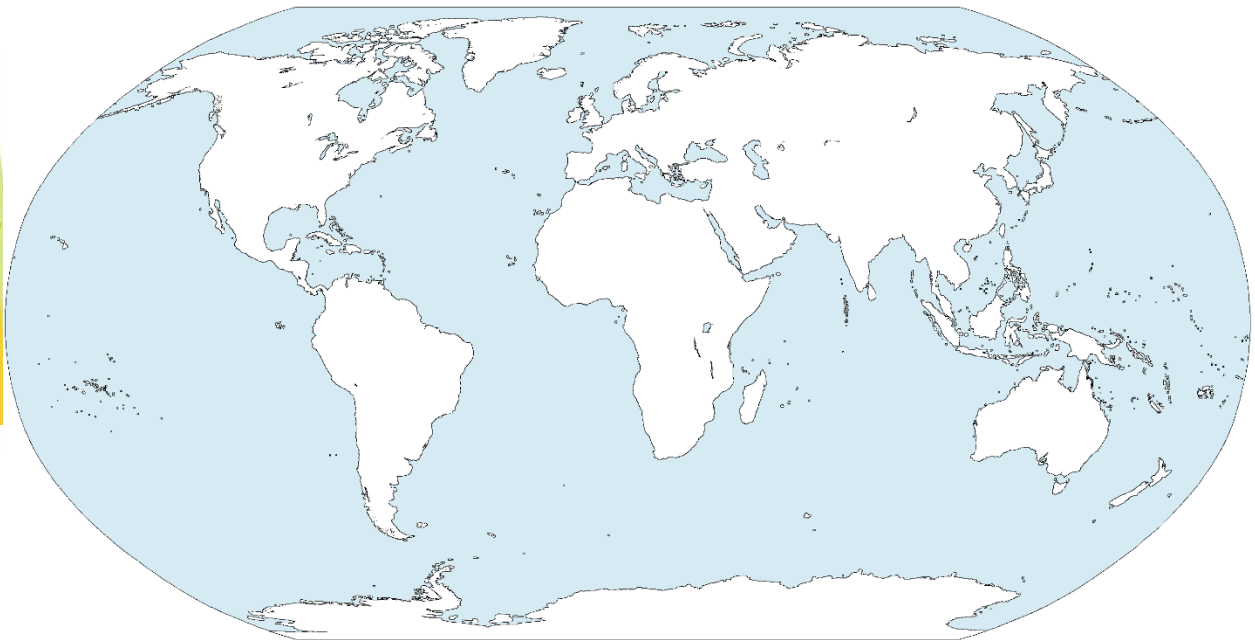
CHAPTER  
15

National Liberation Movements  
in the Colonies

WORK SHEET-3

Map Pointing

2. Point out the following points in India map.



13. Egypt
14. Libya
15. Algeria
16. Morocco
17. Tunisia
18. Sudan
19. The independent country in Africa (Ethiopia)
20. Kenya



www.digitalsocialteacher.in

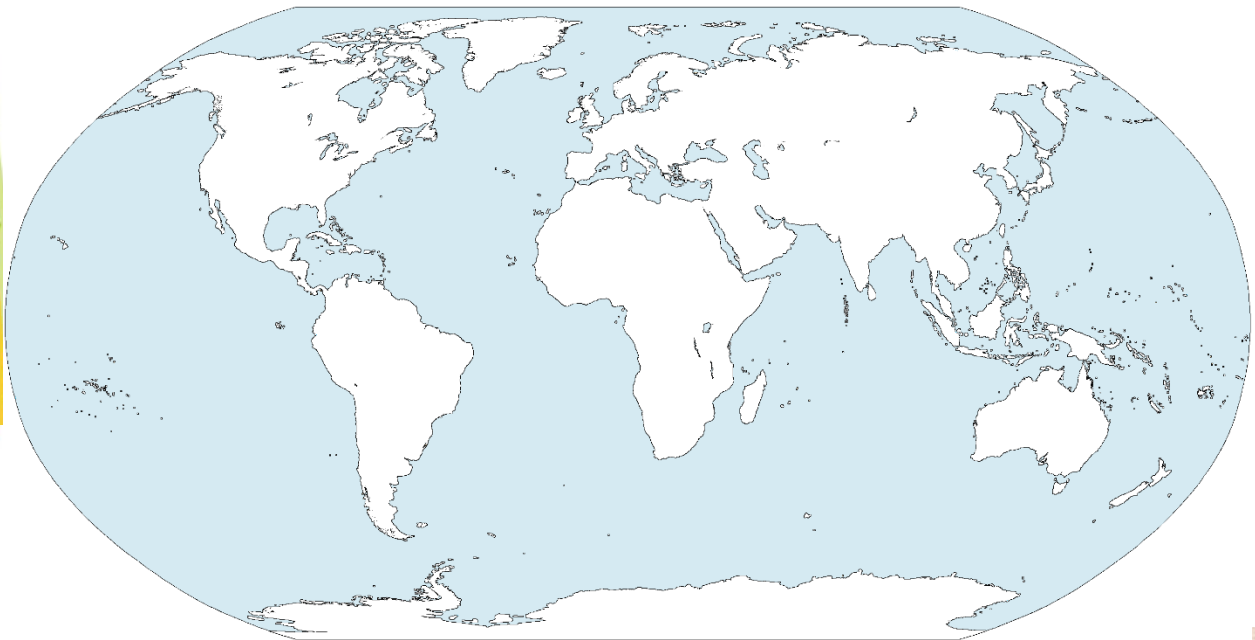
CHAPTER  
15

National Liberation Movements  
in the Colonies

WORK SHEET-3

Map Pointing

3. Point out the following points in India map.



21. Tanzania
22. South Africa
23. Zimbabwe
24. Zambia
25. Madagascar
26. Namibia
27. Angola
28. Nigeria
29. Congo
30. Sahara Desert



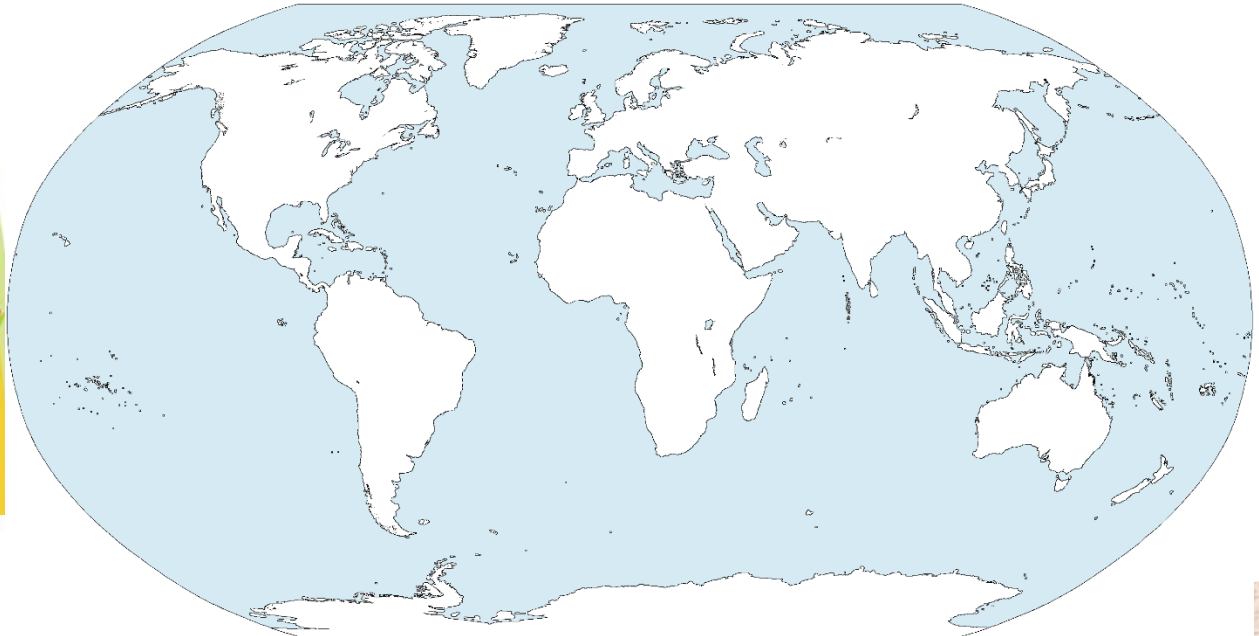


www.digitalsocialteacher.in

WORK SHEET-3

Map Pointing

4. Point out the following points in India map.



31. India
32. Japan
33. Srilanka
34. Bangladesh
35. Pakistan
36. Nepal
37. Separate state of Jews ( Israel)
38. Palestine
39. Iran
40. Iraq
41. The only French colony in Asia (Vietnam)
42. The country where Bandung conference held ( Indonesia)
43. Malaysia
44. Singapore
45. South Korea
46. North Korea



WORK SHEET-3

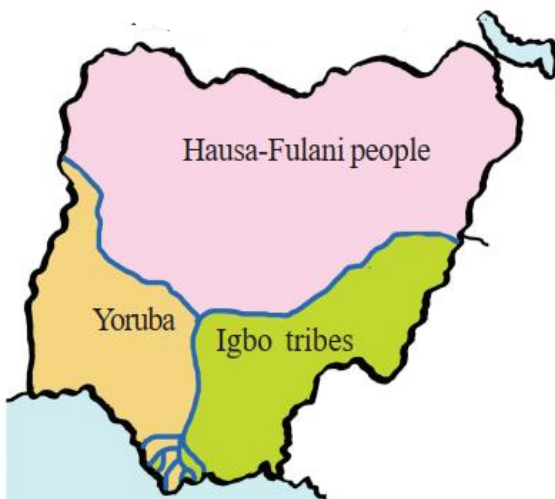
Map Reading

5. Read the following map and answer the below questions.

- a) This map shows which country?
- b) This country was the colony of which country?
- c) This country located in which continent?



6. Read the following map and answer the below questions.



- a) This map shows which country?
- b) Which Tribal people live in South-West Nigeria?
- c) Which Tribal people live in North Nigeria?






CHAPTER  
15

National Liberation Movements  
in the Colonies

WORK SHEET-4

Information Skill

7. Write a sentence about every picture.







CHAPTER  
15

National Liberation Movements  
in the Colonies

WORK SHEET-4

Information Skill

8. Write a sentence about every picture.

